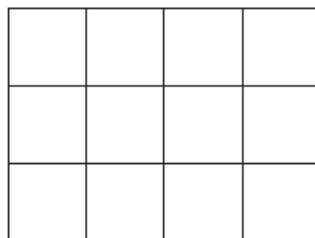
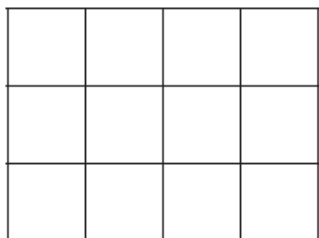


# **m2 = 33 days to go!**

Which fraction,  $\frac{3}{4}$  or  $\frac{2}{3}$ , is larger?

The grids can be used to explain your answer.



Answer \_\_\_\_\_ is larger because \_\_\_\_\_

\_\_\_\_\_ [2]

**21** Expand and simplify

$$4(2x - 3) - 2(x - 5)$$

Answer \_\_\_\_\_ [2]


- 8 Gary asked some people how many times they went to the cinema last month.

Number of times	Number of people
Less than 3	0
3	5
4	11
5	8
6	6
More than 6	0

- (a) How many people did he ask?

Answer \_\_\_\_\_ [1]

- (b) Draw a fully labelled pie chart to show the information in the table.



[4]