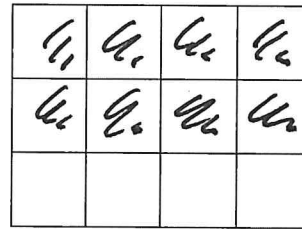
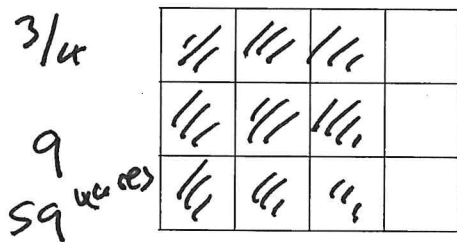


# m2 = 33 days to go!

Which fraction,  $\frac{3}{4}$  or  $\frac{2}{3}$ , is larger?

The grids can be used to explain your answer.



$\frac{2}{3}$  is 8

Answer  $\frac{3}{4}$  is larger because  $\frac{3}{4} = \frac{9}{12}$  and  $\frac{2}{3} = \frac{8}{12}$

[2]

21 Expand and simplify

$$4(2x - 3) - 2(x - 5)$$


Use the CLAW

$$4(2x - 3) - 2(x - 5)$$

$$8x - 12 - 2x + 10$$

2 negatives

Answer  $6x - 2$  [2]



- 8 Gary asked some people how many times they went to the cinema last month.

*Frequency*

Number of times	Number of people
Less than 3	0
3	5
4	11
5	8
6	6
More than 6	0

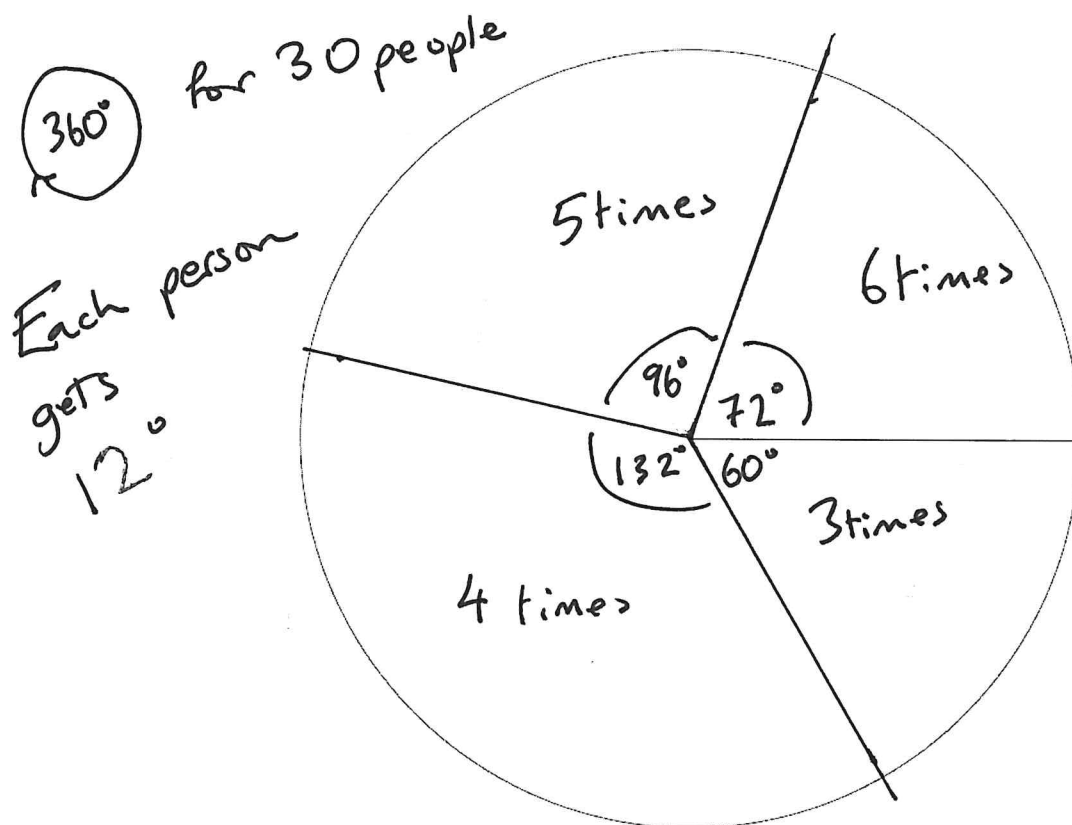
$\times 12$   $0^\circ$   
 $\times 12$   $60^\circ$   
 $\times 12$   $132^\circ$   
 $\times 12$   $96^\circ$   
 $\times 12$   $72^\circ$   
 $\times 12$   $0^\circ$

30

- (a) How many people did he ask?

Answer 30 [1]

- (b) Draw a fully labelled pie chart to show the information in the table.



[4]

Check all angles  
add up to  $360^\circ$