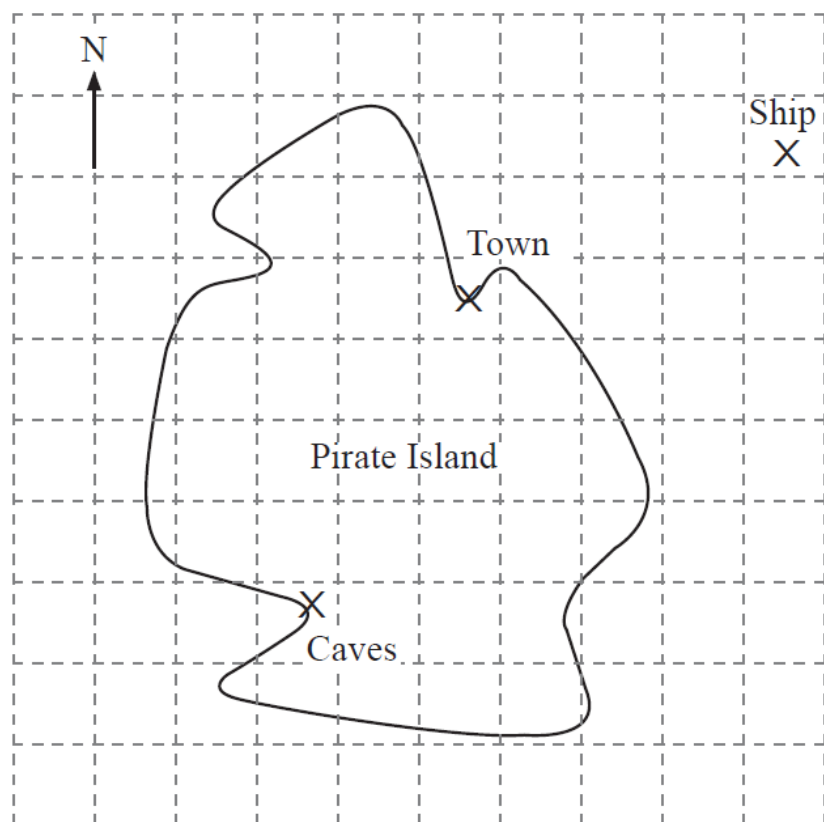


# M7 = 21 days to go!

1





**SCALE**  
**1 cm = 2 km**

Measure and write down the bearing of the ship from the town.

Answer \_\_\_\_\_ ° [2]

7



The two rectangles above have the same area.

Using estimation, work out an estimate for the length, L, of the second rectangle.

Answer L= \_\_\_\_\_ cm [2]

13 Solve

$$12 - n > 4n - 3$$

Answer \_\_\_\_\_ [2]